

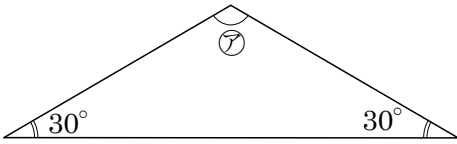
# 27

## 多角形の角 (3)

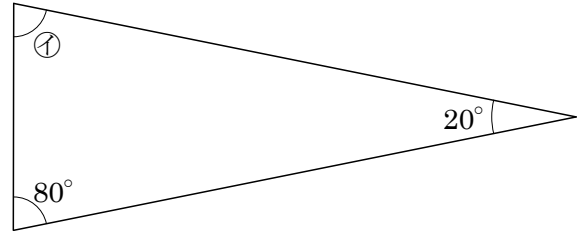
→26へ

年 組 番 名前

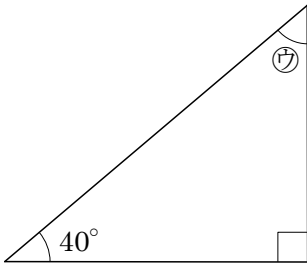
練習1 下の図の㉗~㉛の角度を計算で求め、( ) に書きましょう。



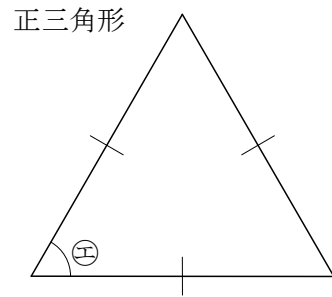
㉗ ( )



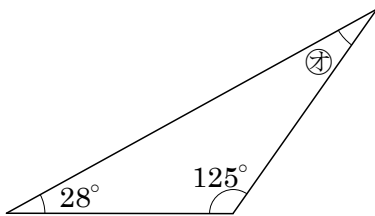
㉘ ( )



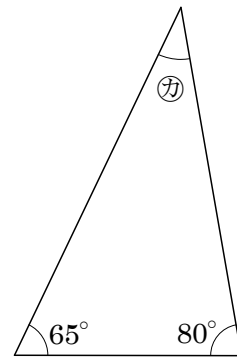
㉙ ( )



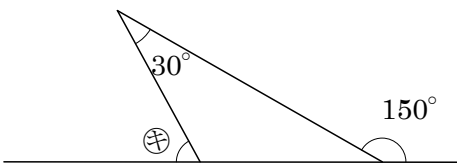
㉚ ( )



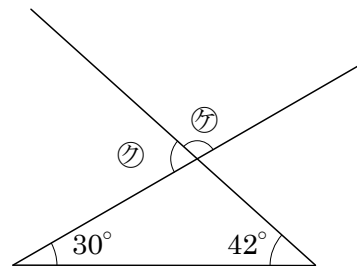
㉛ ( )



㉜ ( )



㉝ ( )



㉞ ( )

㉟ ( )

㊱ ( )