

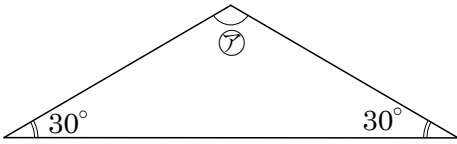
27

多角形の角 (3)

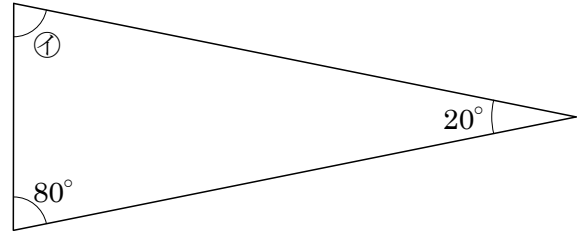
→26へ

年 組 番 名前

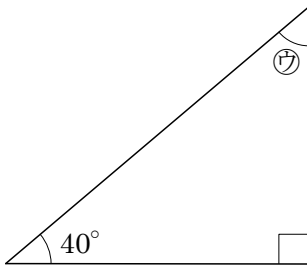
練習1 下の図の㉗~㉛の角度を計算で求め、() に書きましょう。



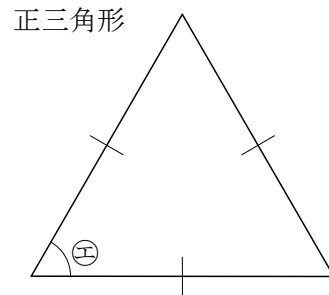
㉗ (120°)



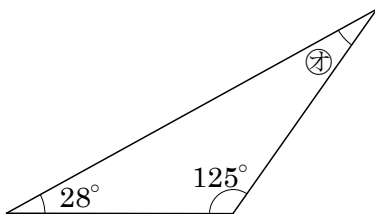
㉘ (80°)



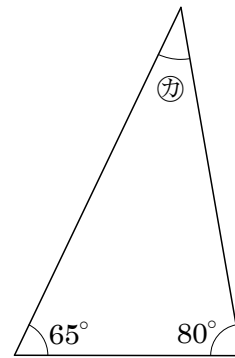
㉙ (50°)



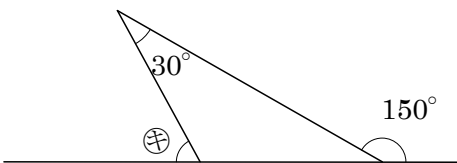
㉚ (60°)



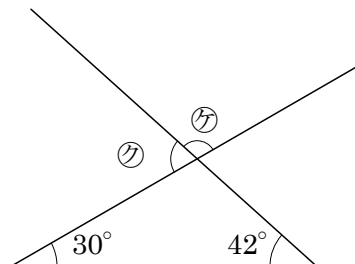
㉛ (27°)



㉜ (35°)



㉝ (60°)



㉞ (72°)

㉟ (108°)